

# Place Value of Whole Numbers Exit Quiz

**Math 4**

In what place is the underlined digit?

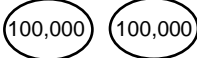
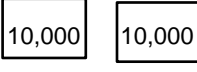
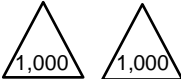



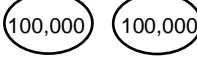
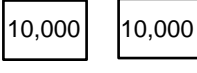
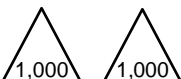

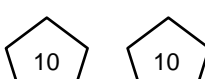

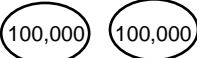
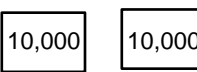
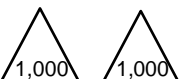
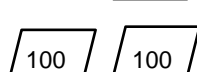
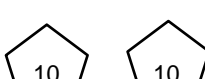

1. 323,562 \_\_\_\_\_

What is the value of the underlined digit?

2. 267,890 \_\_\_\_\_

**353,231**

Shade in the place value shapes and complete the table below to represent the number.

Hundred thousands	Ten thousands	Thousands	Hundreds	Tens	Ones
					
					
					

Complete the following problems:

4.  $200 \times 40 =$

\_\_\_\_\_

5.  $900 \div 3 =$

\_\_\_\_\_