

Name: _____ Period: _____ Date: _____

Money as Decimals

Assignment - SE

Math 4

Write in the missing decimal amounts.




Money	Decimal
	
5 dollars + 6 dimes + 3 pennies	
	
8 dollars + 8 dimes + 7 pennies	
	
6 dollars + 7 dimes + 2 pennies	
	

Name: _____ Period: _____ Date: _____

Money as Decimals

Assignment - SE

Math 4

5 dollars + 3 dimes + 6 pennies	
	
2 dollars + 9 dimes + 3 pennies	
	
4 dimes + 3 pennies	
	
2 quarters + 1 nickel + 2 pennies	
	

Name: _____ Period: _____ Date: _____

Money as Decimals

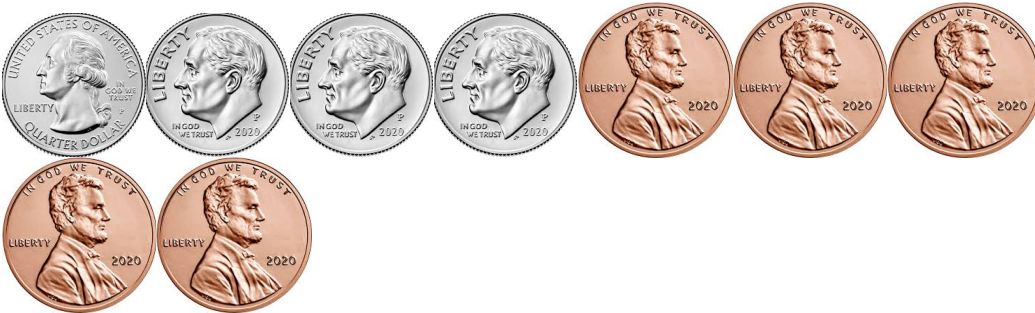
Assignment - SE

Math 4

Sarah had the following money in her wallet. How much does she have?



Fred wants to buy a candy bar for \$0.65. Does he have enough? _____



James bought a snack and got the following as his change. How much did he get?

