

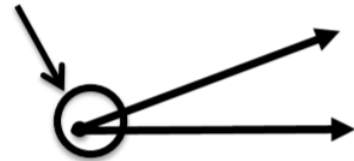
# Angles

Exit Quiz - SE

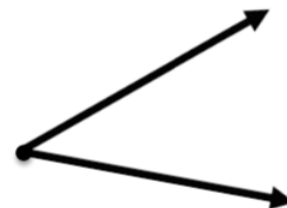
Math 4

1. Match each figure with the correct vocabulary term

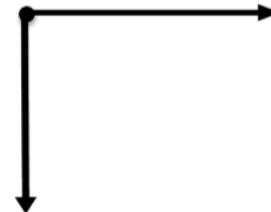
Acute Angle



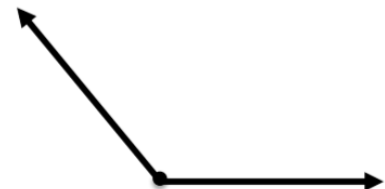
Obtuse Angle



Right Angle



Vertex



2. Which of the following could not be a name for this angle?

a.  $\angle ABC$

b.  $\angle BCA$

c.  $\angle CBA$

