


Name: _____ Period: _____ Date: _____

Multiplication as "Equal Groups of" Bell Work –Teacher Edition **Math 3**

Part A:

Box of Goodies

Choose and encircle a certain number of candies. Draw them in the box below.




2

3

4

5




6

7

8

9




Multiplication as “Equal Groups of” Bell Work –Teacher Edition **Math 3**


Part B:

Group the dots into the specified number:


1. Into 8



2. Into 2



3. Into 5



Part C:

On Repeat

Solve the following repeated addition statements.

1. Add 3 four times

$$3 + 3 + 3 + 3 = 12$$

2. Add 6 three times

$$6 + 6 + 6 = 18$$

3. Add 7 five times

$$7 + 7 + 7 + 7 + 7 = 35$$